

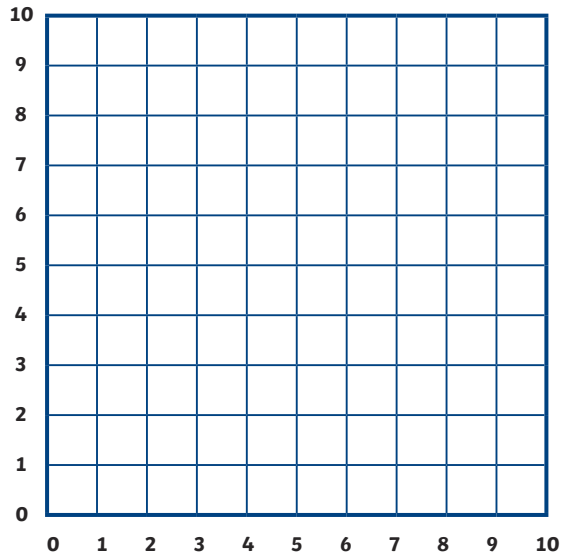
## Constellation

Make a grid with the numbers 1 - 10 across the bottom and up the side (see right). Plot out the coordinates to reveal the constellation.

Can you give the constellation a name?

(1,7) (1,3) (3,2) (5,2)  
(7,2) (9,3) (9,7) (8,5)  
(7,6) (6,5) (5,8) (4,5)  
(3,6) (2,5)

## Space Challenge Card #1

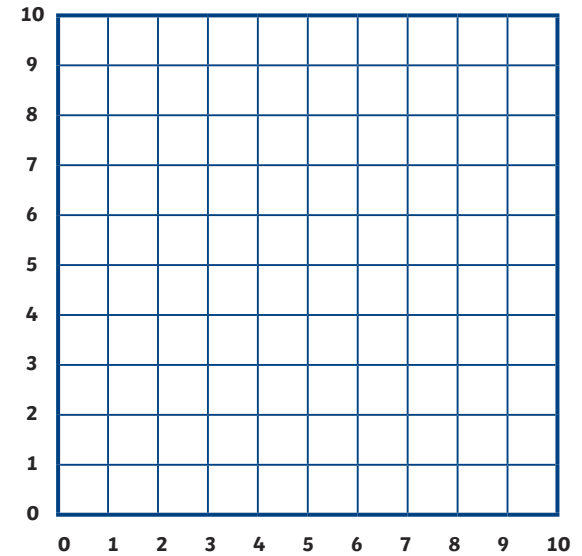


## New Constellation

Make a grid with the numbers 1 - 10 across the bottom and up the side (see below).

Draw the new constellation on your grid and then write out the coordinates.

## Space Challenge Card #2



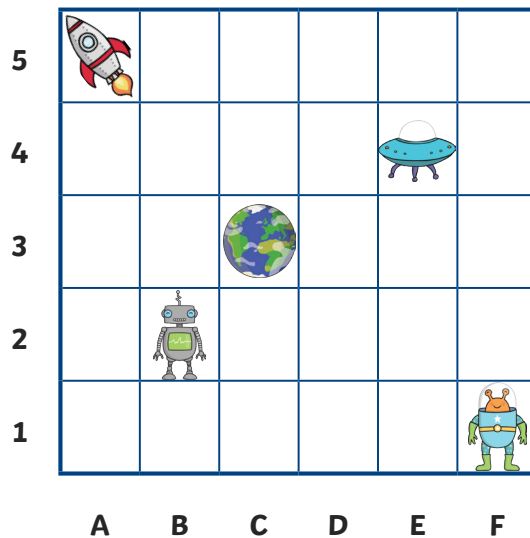
## In the Zone

This is a map of zone 2B.

Can you write the location of the following:

- rocket
- planet
- robot
- alien
- spaceship

## Space Challenge Card #3



## In the Zone

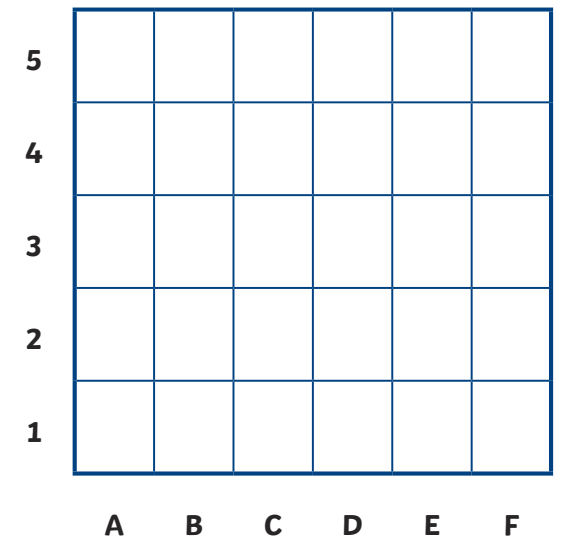
You have been exploring zone 3A. Make a grid with the letters:

A - F across the bottom.

1 - 5 up the side (see example).

Draw the things you find and write down their location.

## Space Challenge Card #4




## Rocket

## Space Challenge Card #5

Can you make a picture of a rocket using only:

- circles
- squares
- triangles



## Space Scene

## Space Challenge Card #6

Can you make a picture of a space scene using only:

- circles
- squares
- triangles

